







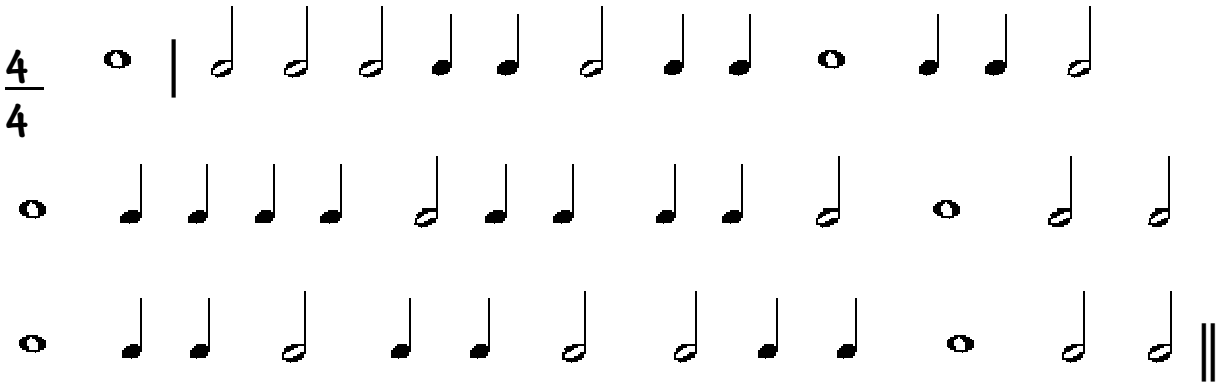


Figuras y Compases, 1

- REDONDA:  = 2  BLANCAS
- BLANCA:  = 2  NEGRAS
- NEGRA:  = 2  CORCHEAS

 Haz grupos que equivalgan a 4  (= 2  = 1 )

$\frac{4}{4}$



  Haz grupos que equivalgan a 2  (= 1  = 4 )

$\frac{2}{4}$

